



#1

How many sides does this shape have?

☐ 7☐ 6☐ 4☐ 5

Show your work

#2

How many corners does this shape have?

☐ 2☐ 4☐ 6☐ 3

Show your work

#3

How many sides does this shape have?

☐ 5☐ 4☐ 2☐ 6

Show your work



#4

How many corners does this shape have?

☐ 3☐ 2☐ 4☐ 5

Show your work

#5


How many corners does this shape have?

☐ 6☐ 7☐ 4☐ 5

Show your work

#6

How many sides does this shape have?

☐ 1☐ 6☐ 4☐ 2

Show your work



#7

How many sides does this shape have?

☐ 1☐ 7☐ 6☐ 4

Show your work

#8


How many sides does this shape have?

☐ 3☐ 7☐ 6☐ 4

Show your work

#9

How many corners does this shape have?


☐ 5☐ 0☐ 3☐ 2

Show your work



#10

How many sides does this shape have?

☐ 6☐ 4☐ 5☐ 1

Show your work

#11


How many sides does this shape have?

☐ 1☐ 4☐ 3☐ 7

Show your work

#12

How many sides does this shape have?

☐ 3☐ 1☐ 6☐ 4

Show your work



Question	Answer
#1	5
#2	4
#3	4
#4	3
#5	4
#6	4
#7	4
#8	4
#9	3
#10	4
#11	4
#12	4