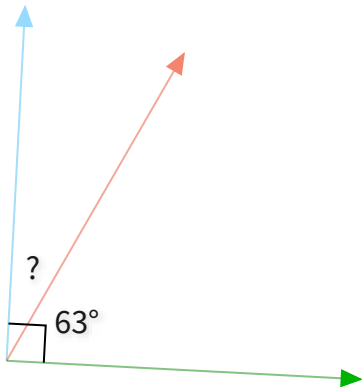




#1

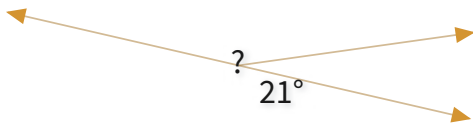
What is the value of a missing angle?



Show your work

#2

What is the value of a missing angle?



☐ 135°

☐ 130°

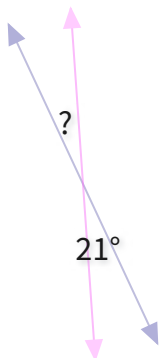
☐ 197°

☐ 159°

Show your work

#3

What is the value of a missing angle?

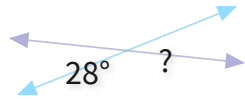


Show your work



#4

What is the value of a missing angle?



☐ 28°

☐ 23°

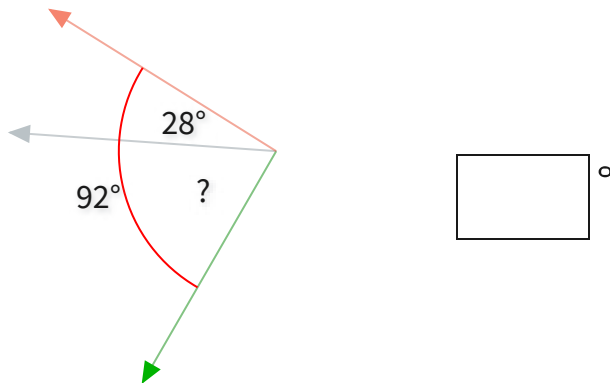
☐ 20°

☐ 32°

Show your work

#5

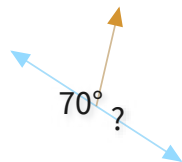
What is the value of a missing angle?



Show your work

#6

What is the value of a missing angle?



☐ 134°

☐ 92°

☐ 110°

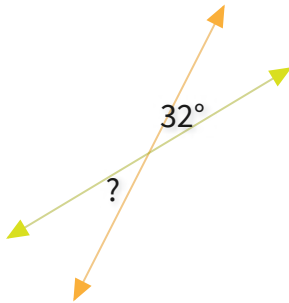
☐ 111°

Show your work



#7

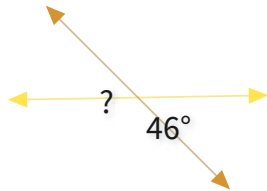
What is the value of a missing angle?



Show your work

#8

What is the value of a missing angle?



☐ 38°

☐ 54°

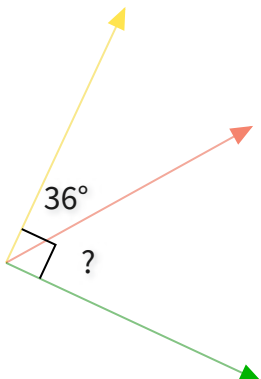
☐ 45°

☐ 46°

Show your work

#9

What is the value of a missing angle?

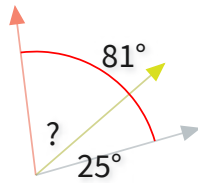


Show your work



#10

What is the value of a missing angle?



☐ 41°

☐ 56°

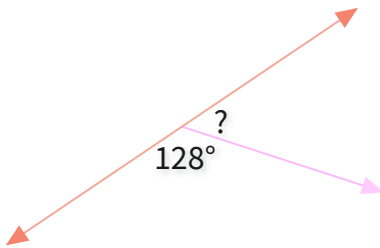
☐ 47°

☐ 60°

Show your work

#11

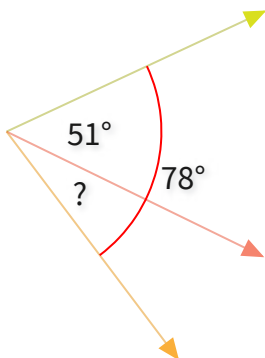
What is the value of a missing angle?



Show your work

#12

What is the value of a missing angle?



Show your work



Question	Answer
#1	27
#2	choice 4
#3	21
#4	choice 1
#5	64
#6	choice 3
#7	32
#8	choice 4
#9	54
#10	choice 2
#11	52
#12	27