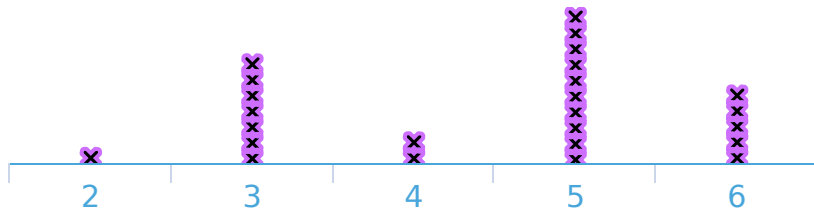


#1

Coach Luke records the number of chin-ups done by each student. How many students did chin-ups?

Chin-Ups per Student



☐ 26

☐ 28

☐ 19


☐ 25

Show your work

#2

Ethan sells tickets at an amusement park and records the number that each person buys. How many people bought tickets?

Tickets Purchased



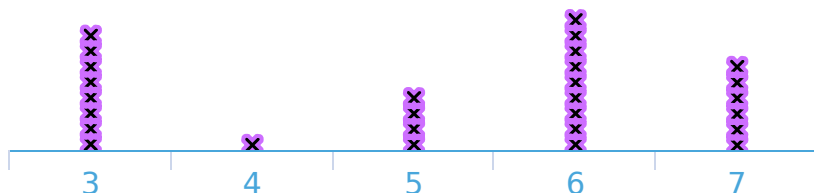
person(s)

Show your work

#3

Lauren is recording how many solar panels are on each house in her neighbourhood. How many solar panels were on the greatest number of houses?

Solar Panels per House



☐ 6

☐ 3

☐ 8

☐ 9

Show your work

#4

Sydney is recording how many solar panels are on each house in her neighbourhood. How many solar panels were on the least number of houses?

Solar Panels per House



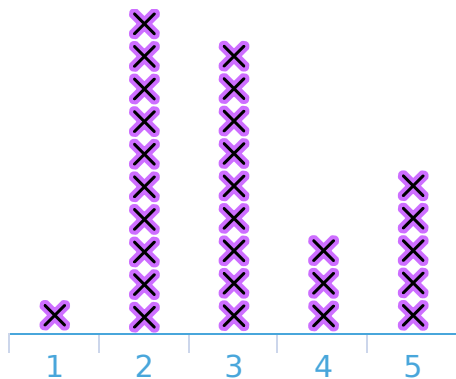
Solar Panels:

Show your work

#5

Noah serves sushi at a party and records how many pieces each person eats. How many pieces did the least number of people eat?

Sushi Eaten



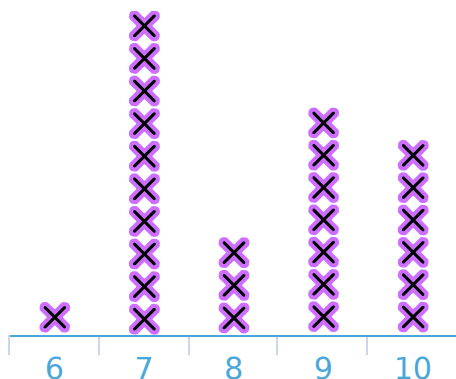
Pieces:

Show your work

#6

A teacher recorded the scores on a quiz. Which score did the greatest number of people receive?

Quiz Scores



Score:

Show your work

#7

Coach Matthew records the long jump distances for each student.  
What distance did the lowest number of students get?

Long Jump  
Distances (ft)



Distance:

Show your work

#8

Hailey is studying bees. She records how many flowers each bee visits before returning to the hive. How many flowers did the greatest number of bees visit?

Flowers Visited



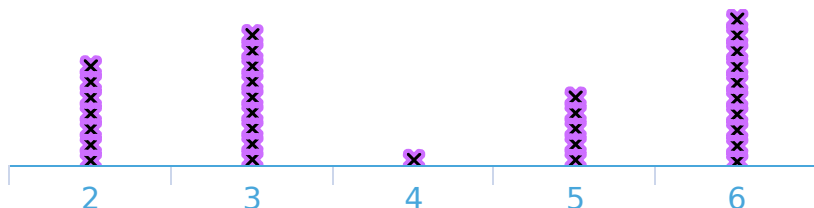
Flowers:

Show your work

#9

Hailey is a teacher and records the number of days that each of her students are absent. How many days did the least number of students miss?

Days Absent



☐ 5

☐ 7

☐ 4

☐ 6

Show your work



#10

Coach Zoe records the number of chin-ups done by each student.  
How many chin-ups did the greatest number of students get?

Chin-Ups per  
Student



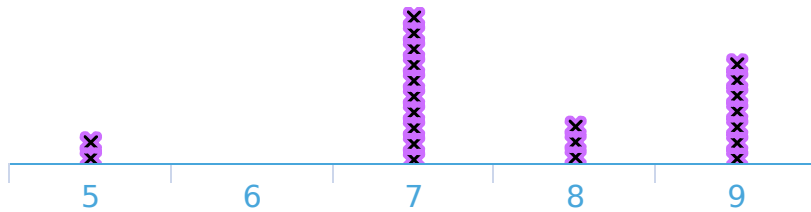
Chin-Ups:

Show your work

#11

Mackenzie owns a store and records the number of items each customer purchased. How many customers made a purchase?

Customer Purchases



☐ 29

☐ 27

☐ 28

☐ 22

Show your work

#12

Coach Savannah records the long jump distances for each student. How many students did the long jump?

Long Jump  
Distances (ft)



student(s)

Show your work

Question	Answer
#1	25
#2	28
#3	6
#4	1
#5	1
#6	7
#7	4
#8	2
#9	4
#10	6
#11	22
#12	21