




#1

What kind of shape is this?



- ☐ cone ☐ hexagon ☐ rectangle

Show your work

#2

What kind of shape is this?




- ☐ square ☐ cylinder ☐ rectangle

Show your work

#3

What kind of shape is this?



- ☐ square ☐ cube ☐ pentagon

Show your work



#4

What kind of shape is this?




- ☐ rectangle ☐ hexagon ☐ triangular pyramid

Show your work

#5

What kind of shape is this?




- ☐ triangular pyramid ☐ rectangular prism ☐ cube

Show your work

#6

What kind of shape is this?




- ☐ triangle ☐ hexagon ☐ rectangular prism

Show your work



#7

What kind of shape is this?




- ☐ triangular pyramid ☐ parallelogram ☐ pentagon

Show your work

#8

What kind of shape is this?




- ☐ cylinder ☐ circle ☐ parallelogram

Show your work

#9

What kind of shape is this?




- ☐ pentagon ☐ cylinder ☐ triangular pyramid

Show your work



#10

What kind of shape is this?



- ☐ rectangle ☐ pentagon ☐ triangle

Show your work

#11

What kind of shape is this?



- ☐ square ☐ rectangle ☐ cone

Show your work

#12

What kind of shape is this?



- ☐ cylinder ☐ rectangular prism ☐ square

Show your work

Question	Answer
#1	choice 1
#2	choice 2
#3	choice 3
#4	choice 2
#5	choice 3
#6	choice 2
#7	choice 3
#8	choice 2
#9	choice 1
#10	choice 2
#11	choice 2
#12	choice 1