




#1


Do these lines appear perpendicular?

☐ Yes☐ No

Show your work

#2

Are these lines intersecting?

☐ Yes☐ No

Show your work

#3

Are these lines intersecting?


☐ Yes☐ No

Show your work



#4



Do these lines appear perpendicular?

☐ Yes☐ No

Show your work

#5

Are these lines intersecting?

☐ No☐ Yes

Show your work

#6

Are these lines intersecting?


☐ Yes☐ No

Show your work



#7

Do these lines appear perpendicular?

☐ Yes☐ No

Show your work

#8


Do these lines appear perpendicular?

☐ Yes☐ No

Show your work

#9

Do these lines appear perpendicular?


☐ Yes☐ No

Show your work



#10


Are these lines intersecting?

☐ Yes☐ No

Show your work

#11


Do these lines appear parallel?

☐ Yes☐ No

Show your work

#12

Do these lines appear parallel?

☐ Yes☐ No

Show your work



Question	Answer
#1	choice 2
#2	choice 1
#3	choice 1
#4	choice 2
#5	choice 2
#6	choice 1
#7	choice 1
#8	choice 1
#9	choice 2
#10	choice 1
#11	choice 2
#12	choice 1