

#1

Which shape has 3 corners?

Square

Equilateral Triangle

Pentagon



Show your work

#2

Which shape has 2 acute angles and 2 obtuse angles?

Square

Trapezoid

Rectangle



Show your work

#3

Which shape has 3 equal sides?

Rhombus

Equilateral Triangle


Right Triangle



Show your work

#4


Which shape has 3 equal sides?



Show your work

#5


Which shape has 3 equal angles?



Show your work

#6

Which shape has 4 equal sides?



Show your work

#7

Which shape has 5 angles?

Pentagon

Trapezoid

Rectangle

☐
☐
☐

Show your work

#8

Which shape has 3 sides?

Pentagon

Equilateral Triangle

Square

☐
☐
☐

Show your work

#9

Which shape has 2 acute angles and 2 obtuse angles?

Rectangle

Trapezoid

Square

☐
☐
☐

Show your work

#10

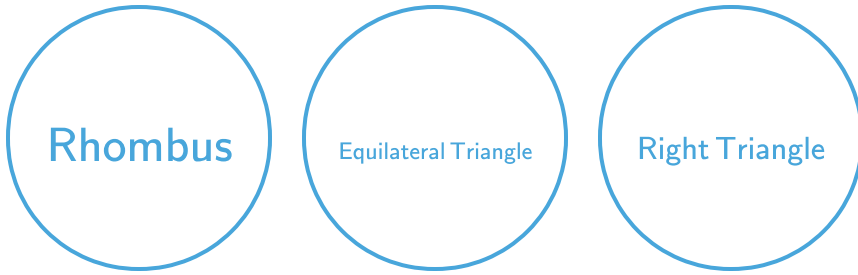
Which shape has 3 corners?



Show your work

#11

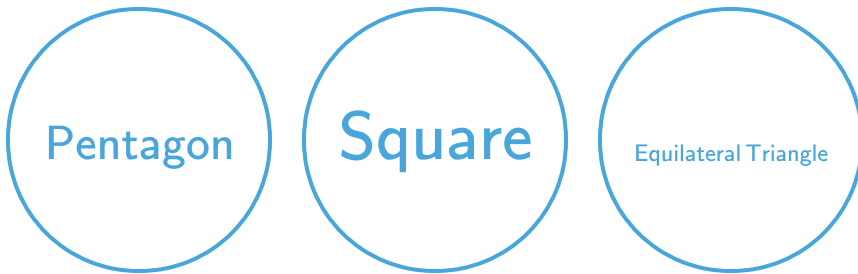
Which shape has 3 equal angles?



Show your work

#12

Which shape has 3 corners?



Show your work

Question	Answer
#1	choice 2
#2	choice 2
#3	choice 2
#4	choice 1
#5	choice 3
#6	choice 2
#7	choice 1
#8	choice 2
#9	choice 2
#10	choice 3
#11	choice 2
#12	choice 3