




#1

How many faces does this object have?

☐ 6☐ 3☐ 2☐ 5

Show your work

#2


How many faces does this object have?

☐ 4☐ 2☐ 6☐ 1

Show your work

#3

How many faces does this object have?


☐ 6☐ 9☐ 8☐ 3

Show your work



#4

How many faces does this object have?

☐ 3☐ 4☐ 5☐ 2

Show your work

#5


How many faces does this object have?

☐ 6☐ 3☐ 4☐ 5

Show your work

#6

How many faces does this object have?

☐ 3☐ 7☐ 5☐ 6

Show your work



#7

How many faces does this object have?

☐ 2☐ 6☐ 4☐ 1

Show your work

#8


How many faces does this object have?

☐ 6☐ 7☐ 1☐ 4

Show your work

#9

How many faces does this object have?

☐ 4☐ 2☐ 8☐ 5

Show your work



#10

How many faces does this object have?

☐ 5☐ 6☐ 3☐ 7

Show your work

#11

How many faces does this object have?

☐ 4☐ 7☐ 6☐ 2

Show your work

#12

How many faces does this object have?

☐ 6☐ 4☐ 1☐ 2

Show your work

Question	Answer
#1	5
#2	4
#3	6
#4	5
#5	4
#6	6
#7	4
#8	4
#9	5
#10	5
#11	4
#12	4