



#1

Which objects have the same shape as this one.



Show your work

#2

Which objects have the same shape as this one.



Show your work

#3

Which objects have the same shape as this one.



Show your work



#4

Which objects have the same shape as this one.



Show your work

#5

Which objects have the same shape as this one.



Show your work

#6

Which objects have the same shape as this one.



Show your work



#7

Which objects have the same shape as this one.



Show your work

#8


Which objects have the same shape as this one.



Show your work

#9

Which objects have the same shape as this one.




Show your work



#10


Which objects have the same shape as this one.



Show your work

#11

Which objects have the same shape as this one.



Show your work

#12

Which objects have the same shape as this one.



Show your work



Question	Answer
#1	choice 1, choice 4
#2	choice 4, choice 1
#3	choice 2
#4	choice 4
#5	choice 3, choice 2
#6	choice 2
#7	choice 1
#8	choice 3, choice 1
#9	choice 4, choice 2
#10	choice 1, choice 4
#11	choice 2, choice 4
#12	choice 3, choice 4